



Determine the name of each coin shown.

1)



2)



3)



4)



5)



6)



7)



8)



Answers

1. _____

2. _____

3. _____

4. _____

5. _____

6. _____

7. _____

8. _____



Determine the name of each coin shown.



Answers

1. penny

2. dime

3. nickel

4. quarter

5. dime

6. penny

7. nickel

8. quarter



Determine the name of each coin shown.

Answers



1. _____



2. _____



3. _____



4. _____



5. _____



6. _____



7. _____



8. _____



Determine the name of each coin shown.



Answers

1. penny

2. dime

3. nickel

4. quarter

5. nickel

6. quarter

7. dime

8. penny



Determine the name of each coin shown.

Answers



1. _____



2. _____



3. _____



4. _____



5. _____



6. _____




7. _____



8. _____



Determine the name of each coin shown.



Answers

1. quarter

2. penny

3. penny

4. nickel

5. dime

6. dime

7. quarter

8. nickel



Determine the name of each coin shown.

Answers



1. _____



2. _____



3. _____



4. _____



5. _____



6. _____



7. _____



8. _____



Determine the name of each coin shown.



Answers

1. dime

2. quarter

3. penny

4. dime

5. penny

6. nickel

7. quarter

8. nickel



Determine the name of each coin shown.

Answers



1. _____



2. _____



3. _____



4. _____



5. _____



6. _____



7. _____



8. _____



Determine the name of each coin shown.



Answers

1. nickel

2. nickel

3. penny

4. quarter

5. quarter

6. dime

7. penny

8. dime



Determine the name of each coin shown.

Answers



1. _____



2. _____



3. _____



4. _____



5. _____



6. _____




7. _____



8. _____



Determine the name of each coin shown.



Answers

1. penny

2. quarter

3. penny

4. quarter

5. nickel

6. nickel

7. dime

8. dime



Determine the name of each coin shown.

Answers



1. _____



2. _____



3. _____



4. _____



5. _____



6. _____



7. _____



8. _____



Determine the name of each coin shown.



Answers

1. penny

2. quarter

3. quarter

4. dime

5. nickel

6. dime

7. penny

8. nickel



Determine the name of each coin shown.

Answers



1. _____



2. _____



3. _____



4. _____



5. _____



6. _____



7. _____



8. _____



Determine the name of each coin shown.



Answers

1. dime

2. penny

3. penny

4. dime

5. nickel

6. quarter

7. quarter

8. nickel



Determine the name of each coin shown.

Answers



1. _____




2. _____



3. _____



4. _____



5. _____



6. _____



7. _____



8. _____



Determine the name of each coin shown.



Answers

1. nickel

2. quarter

3. dime

4. dime

5. nickel

6. quarter

7. penny

8. penny



Determine the name of each coin shown.

Answers



1. _____



2. _____



3. _____



4. _____



5. _____



6. _____



7. _____



8. _____



Determine the name of each coin shown.



Answers

1. penny

2. nickel

3. quarter

4. quarter

5. dime

6. penny

7. dime

8. nickel